

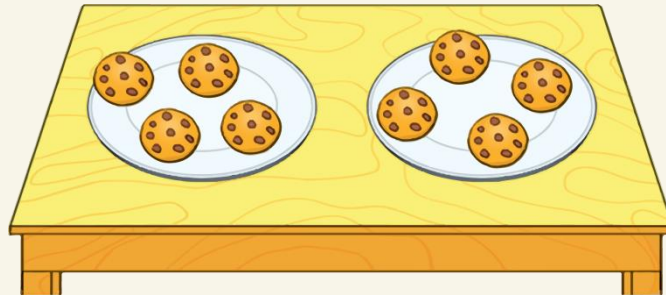
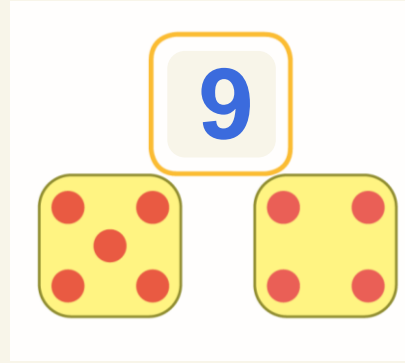
# KHỞI ĐỘNG



# Trò chơi

## CHỌN QUÀ MAY MẮN






4

và

4

được

8




Chúc mừng bạn đã chọn được  
hộp quà may mắn!

# BÀI 10


# PHÉP CỘNG TRONG PHẠM VI 10



KHÁM  
PHÁ








a)

Gộp 3 quả bóng và 2 quả bóng  
được mấy quả bóng?




$$3 + 2 = 5$$

Ba cộng hai bằng năm. Dấu cộng: +




Khám phá

b)



$$1 + 3 = 4$$

Một cộng ba bằng bốn.

A wooden pencil with a pink eraser and a blue band is positioned diagonally, pointing towards a red plus sign (+) on a blue grid. The grid consists of solid blue lines forming a 4x4 grid, with dashed blue lines extending to a 6x6 grid.

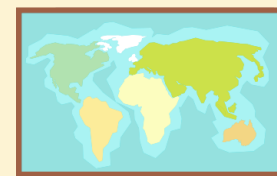
+

The equation  $1 + 2 = 3$  is written in large red numbers on a blue grid. The grid consists of solid blue lines forming a 4x4 grid, with dashed blue lines extending to a 6x6 grid.

$1 + 2 = 3$



# HOẠT ĐỘNG






## hoạt động

# 1. SỐ ?




$$1 + 1 = \boxed{2}$$



$$3 + 1 = \boxed{4}$$



$$2 + 1 = \boxed{3}$$




$$1 + 4 = \boxed{5}$$



hoạt động


## 2. SỐ ?

a)



$$2 + ? = ?$$

b)



$$4 + ? = ?$$

a)



$$\boxed{2} + \boxed{2} = \boxed{4}$$

b)




$$4 + 1 = 5$$




hoạt động

### 3. SỐ ?

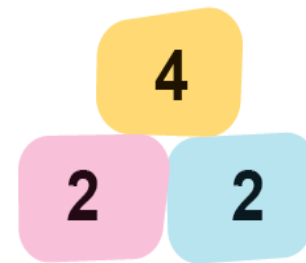
a)



$$2 + 3 = \boxed{5}$$




$$1 + 2 = \boxed{?}$$




$$2 + 2 = \boxed{?}$$


b)



$$1 + 1 = \boxed{?}$$




$$3 + 1 = \boxed{?}$$




$$2 + 1 = \boxed{?}$$



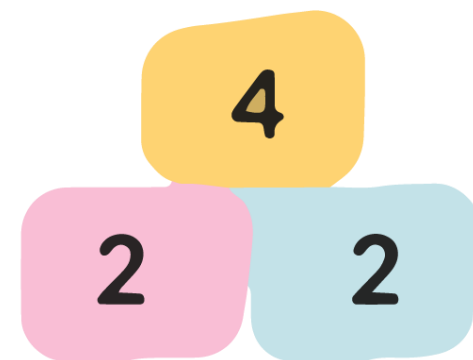
a)



$$2 + 3 = 5$$




$$1 + 2 = 3$$



$$2 + 2 = 4$$



b)



$$1 + 1 = 2$$



$$3 + 1 = 4$$



$$2 + 1 = 3$$



VĂN  
DỤNG



# Cuộc tranh tài bắt đầu!

Tớ là người nói đúng!


Tớ là người nói đúng!

Tớ là người nói đúng!



$$3 + 1 = ?$$



2 



4 




5 





$$4 + ? = 5$$



1



2



3





$$3 + 2 = ?$$



1



4



5



CHÚC CÁC EM

HỌC TỐT!

